

0	1	2	3	4	5	6	7	8	9	10	11	12	13	14	15	16	17	18	19	20
---	---	---	---	---	---	---	---	---	---	----	----	----	----	----	----	----	----	----	----	----

MATEMATIKA 25.5. – 29.5. 2020


Prirodzené čísla od 0- 20

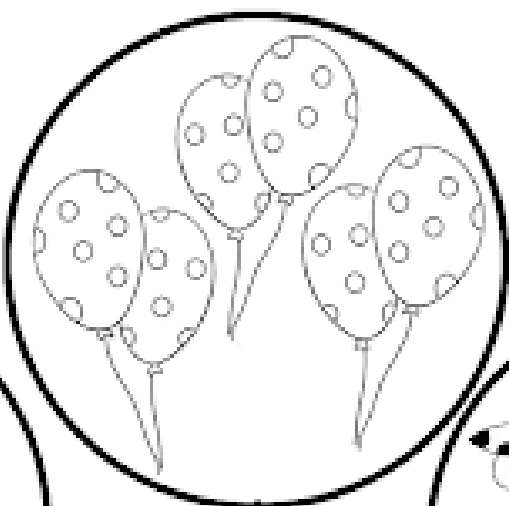


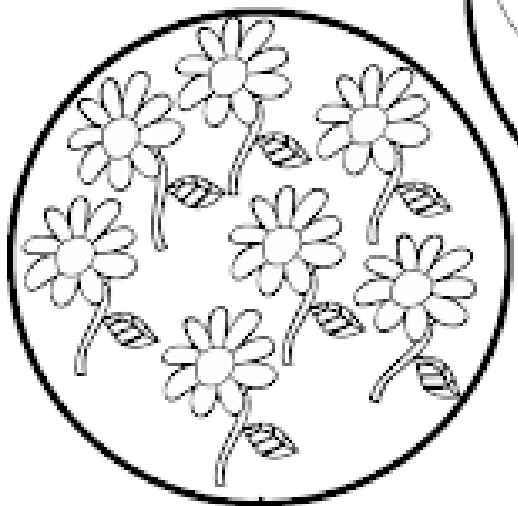
1. Počítaj do 20 na prstoch, spomeň si ako ukazujeme číslo 10- prekríž nohy. Začni 0 1 2.... a tiež naspäť od 20 19 18....

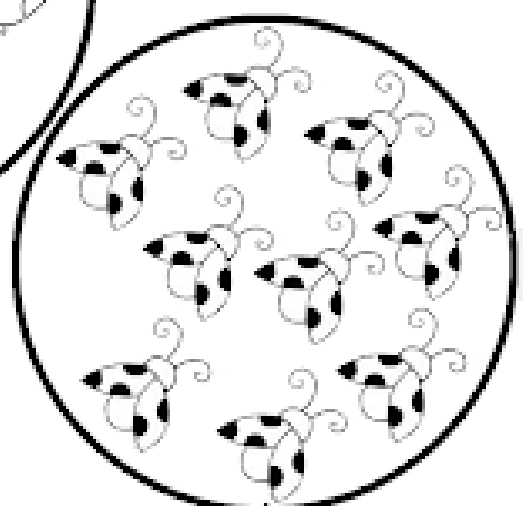
2. Spočítaj a zapiš počet.

















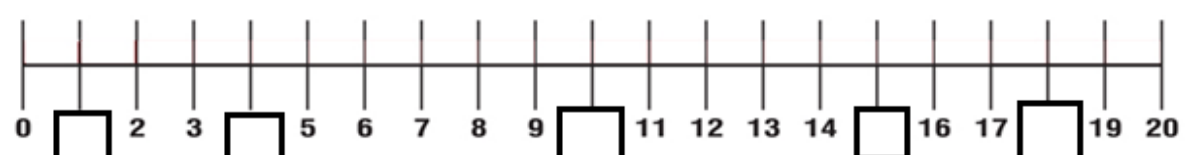
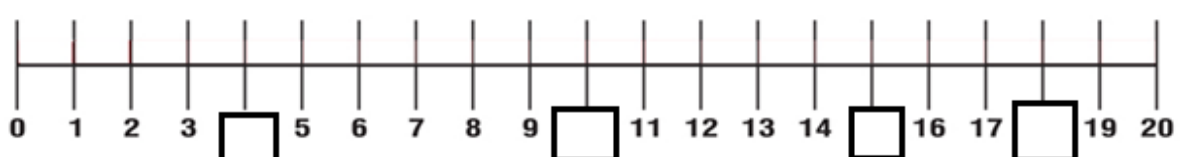
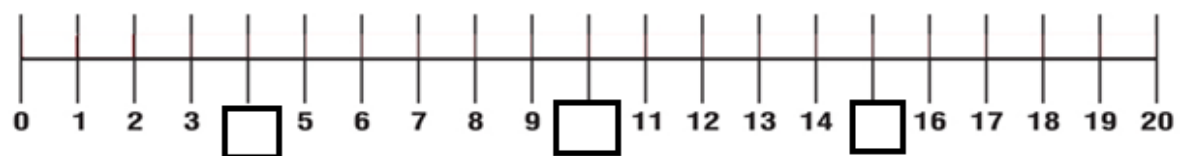
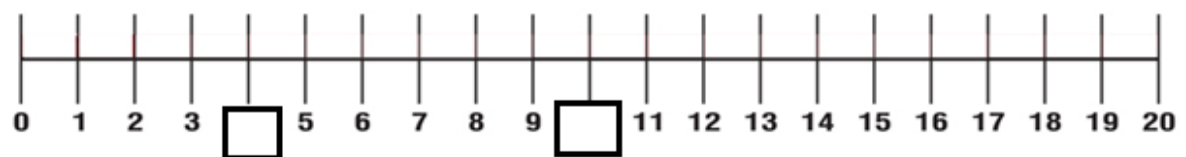
3. Dokresli na balóniky guľičky podľa čísla. Pri kreslení počítaj nahlas.



4. Dopln chýbajúce čísla do číselného radu.

0		2			5	6		8		10
10		12		14			17			20
	1		3			6		8		
10			13			16		18		
0	1			4	5		7			10

5. Dopln chýbajúce čísla na číselnej osi.

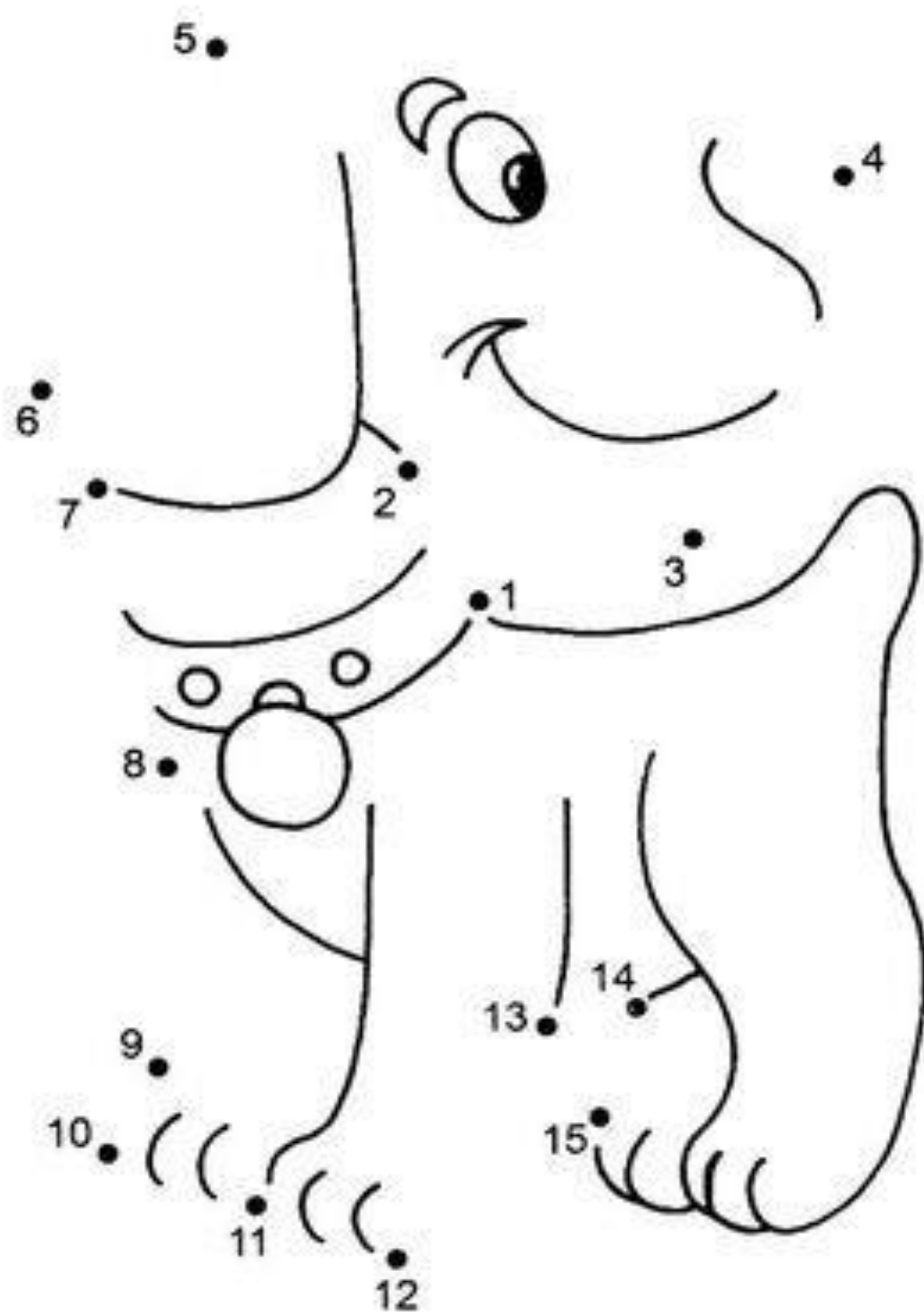


6. Usporiadaj čísla od najmenšieho po najväčšie. Hovor si nahlas číselný rad.

4	2	8	2 4 8
7	1	10	
9	3	5	

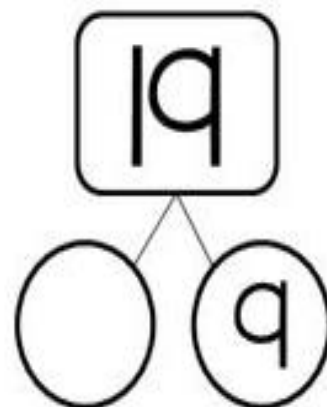
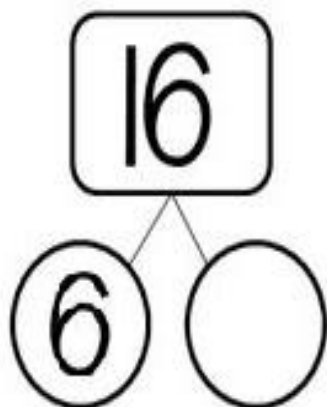

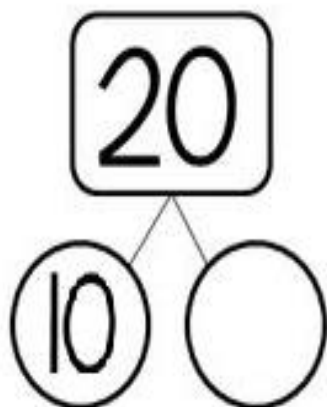
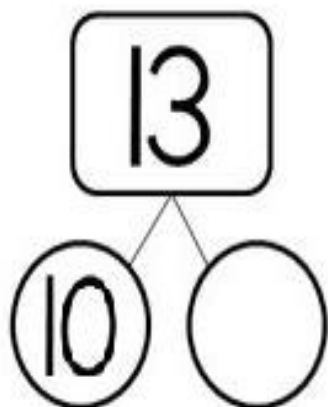
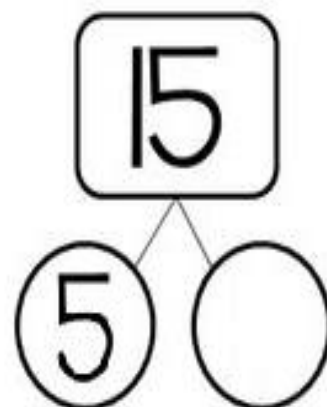
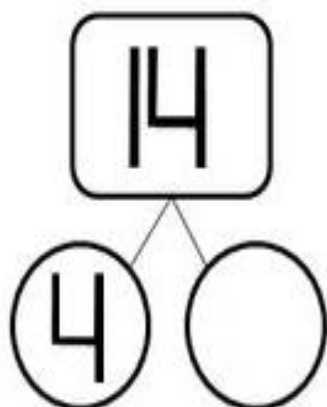
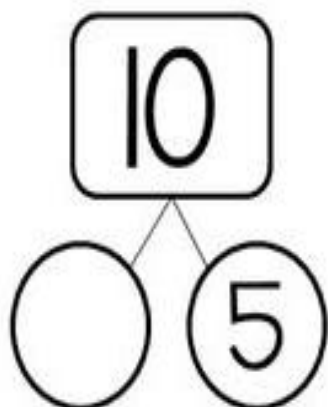
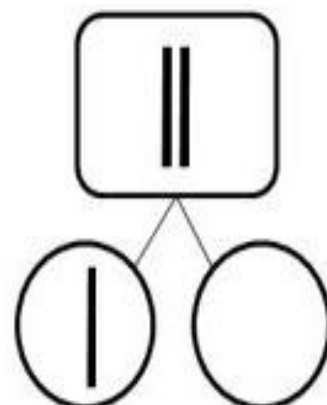
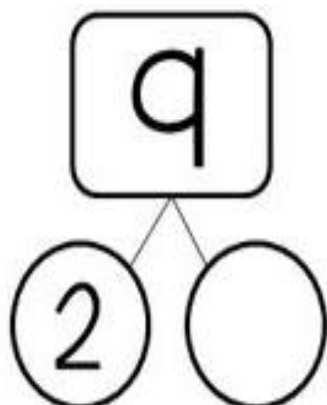

19	17	11	
14	18	12	
15	13	16	

7. Spoj bodky od najmenšieho čísla po najväčšie. Hovor si nahlas číselný rad. Obrázok si vyfarbi.



Čo je to? _____

8. Rozlož číslo. Spomeň si! Máš cukríky a chceš sa podeliť so spolužiakom Damiánom.



9. Porovnaj. Znak vystrihni a správne prilep do prázdneho okienka.

$12 \square 12$

$13 \square 12$

$20 \square 16$

$17 \square 19$

$18 \square 18$

$15 \square 12$

$13 \square 11$

$14 \square 16$

$11 \square 12$

$11 \square 14$

$15 \square 16$

$20 \square 17$

||

>

||

>

<

<

>

<









>

<

<

>

10. Zapiš a vypočítaj.

 $\underline{\quad} + \underline{\quad} = \underline{\quad}$	 $\underline{\quad} + \underline{\quad} = \underline{\quad}$
 $\underline{\quad} + \underline{\quad} = \underline{\quad}$	 $\underline{\quad} + \underline{\quad} = \underline{\quad}$
 $\underline{\quad} + \underline{\quad} = \underline{\quad}$	 $\underline{\quad} + \underline{\quad} = \underline{\quad}$
 $\underline{\quad} + \underline{\quad} = \underline{\quad}$	 $\underline{\quad} + \underline{\quad} = \underline{\quad}$

11.Vypočítaj. Pomôž si kreslením guľičiek nad čísla.

• • • •
 $1 + 3 = 4$

$10 + 2 =$

$3 + 10 =$

$4 + 5 =$

$10 + 8 =$

$5 + 10 =$

$8 + 2 =$

$10 + 1 =$

$7 + 10 =$

$6 + 3 =$

$10 + 4 =$

$0 + 10 =$

$4 + 4 =$

$10 + 9 =$

$6 + 10 =$

12.Vypočítaj. Pomôž si kreslením guľičiek a odškrtačovaním.

• • • /
 $3 - 1 = 2$

$10 - 2 =$

$13 - 3 =$

$5 - 4 =$

$10 - 8 =$

$15 - 5 =$

$8 - 2 =$

$10 - 1 =$

$17 - 7 =$

$6 - 3 =$

$10 - 4 =$

$10 - 0 =$

$4 - 4 =$

$10 - 9 =$

$16 - 6 =$

13.Doplň znamienko + -

$10 + 4 = 14$

$2 \quad 10 = 12$

$6 \quad 1 = 7$

$10 \quad 3 = 13$

$7 \quad 10 = 17$

$3 \quad 0 = 3$

$15 \quad 5 = 10$

$19 \quad 9 = 10$

$8 \quad 4 = 4$

$18 \quad 8 = 10$

$11 \quad 1 = 10$

$5 \quad 2 = 3$

14. Vypočítaj a vyfarbi podľa pokynov.

