


Pondelok 8.6.2020

Princezná Alenka rada počíta príklady. Ak chceš, môžete počítať spolu.



$4 + 5 =$

$2 + 1 =$

$3 + 5 =$

$4 + 2 =$

$9 - 2 =$

$2 + 4 =$

$7 - 5 =$

$7 + 2 =$

$2 + 2 =$

$3 + 1 =$

$2 - 2 =$

$1 + 4 =$

$2 + 3 =$

$1 + 2 =$

$2 + 3 =$

$9 - 1 =$

$4 + 1 =$

$4 - 3 =$

$5 + 2 =$

Je to väčšie, menšie alebo sa rovná?

< > =

5		2
---	--	---

1		3
---	--	---

4		5
---	--	---

2		2
---	--	---

Utorok 9.6.2020

Slonica Veronika a sloník Mirko dostali na domácu úlohu vypočítať príklady.

Keďže v škole nedávali pozor, tak ich nevedia vypočítať. Naučíš ich to ?



$$3 + 2 =$$

$$4 + 3 =$$

$$5 - 4 =$$

$$4 - 4 =$$

$$2 + 5 =$$

$$6 - 3 =$$

$$8 - 2 =$$


$$5 + 1 =$$

$$4 - 2 =$$

$$9 - 2 =$$

$$4 + 2 =$$

$$5 + 3 =$$



$$3 - 2 =$$

$$4 + 4 =$$

$$2 + 5 =$$

$$5 - 2 =$$

$$4 - 0 =$$

Streda 10. 6. 2020

Vypočítaj.

$1 + 1 =$

$3 + 3 =$

$4 + 2 =$

$2 + 3 =$

$1 + 4 =$

$4 + 3 =$

$1 + 2 =$

$1 + 5 =$

$0 + 3 =$

$3 + 2 =$

$4 + 3 =$

$1 + 7 =$

$3 + 1 =$

$2 + 6 =$

$1 + 8 =$

$5 + 3 =$

$5 + 4 =$

$1 + 1 =$

$7 + 2 =$

$3 + 2 =$

$3 + 4 =$



$9 + 1 =$

$2 + 4 =$

$4 + 2 =$

$2 + 3 =$

$1 + 8 =$



Štvrtok 11. 6. 2020

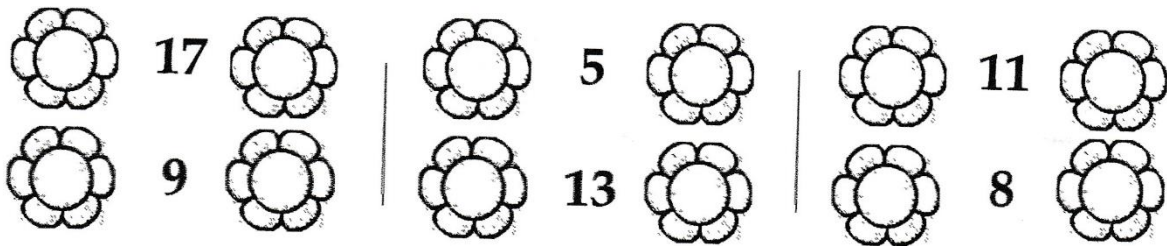
Doplň správne číslo:

$$\begin{aligned} 11 + \bigcirc &= 18 \\ 12 + \bigcirc &= 14 \\ 15 + \bigcirc &= 19 \\ 13 + \bigcirc &= 20 \end{aligned}$$

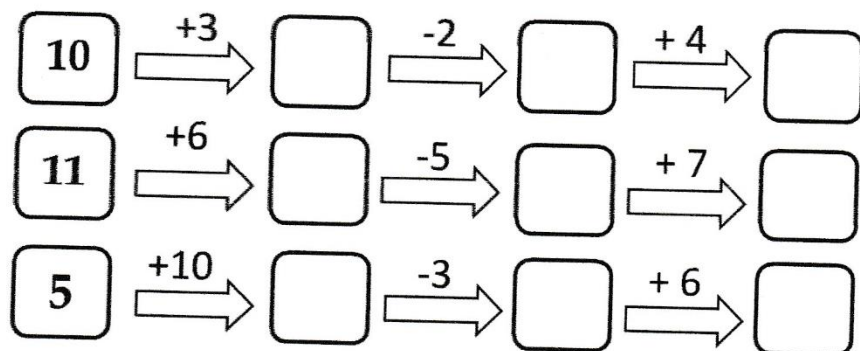
$$\begin{aligned} 14 + \bigcirc &= 17 \\ 17 + \bigcirc &= 19 \\ 18 - \bigcirc &= 13 \\ 15 - \bigcirc &= 12 \end{aligned}$$

$$\begin{aligned} 13 - \bigcirc &= 10 \\ 19 - \bigcirc &= 13 \\ 18 - \bigcirc &= 18 \\ 20 - \bigcirc &= 11 \end{aligned}$$

Doplň číslo, ktoré je hneď pred a hneď za:






Vypočítaj:



Piatok 12. 6. 2020

Porovnaj čísla.



12		4
6		15
11		16
8		9
10		13
20		3
12		7

8		0
3		13
17		9
6		12
19		11
5		3
12		14

15		15
11		3
8		16
10		9
13		13
18		1
6		9

6		8
13		12
16		5
4		14
11		20
15		16
12		11

