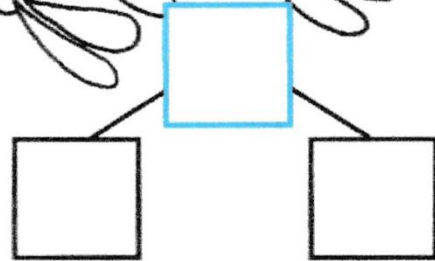
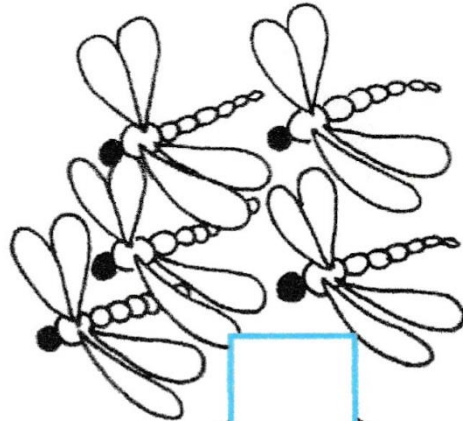
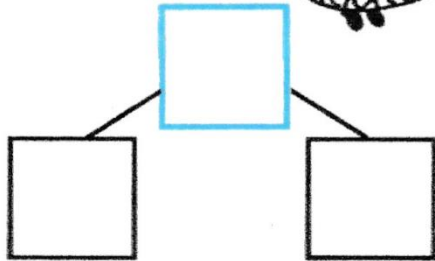



Pondelok 15.6.2020

Sčítaj a zapíš počet živočíchov. Rozlož zapísané číslo.



Vypočítaj

$$\begin{array}{l} 1 + 4 = \square \\ 5 - 3 = \square \\ 3 + 2 = \square \\ 4 + 1 = \square \end{array}$$

$$\begin{array}{l} 5 - 2 = \square \\ 2 + 3 = \square \\ 1 + 3 = \square \\ 2 - 1 = \square \end{array}$$

$$\begin{array}{l} 4 - 3 = \square \\ 3 + 1 = \square \\ 2 + 2 = \square \\ 5 - 4 = \square \end{array}$$

Doplň znamienko + alebo -.


$$\begin{array}{l} 1 \square 4 = 5 \\ 5 \square 3 = 2 \end{array}$$

$$\begin{array}{l} 5 \square 2 = 3 \\ 2 \square 1 = 1 \end{array}$$


$$\begin{array}{l} 3 \square 2 = 5 \\ 4 \square 1 = 3 \end{array}$$

$$\begin{array}{l} 4 \square 3 = 1 \\ 2 \square 2 = 1 \end{array}$$

Zapíš a vypočítaj slovné úlohy na obrázku.



$$\square + \square = \square$$



$$\square - \square = \square$$

Utorok 16.6.2020

Porovnaj, doplň znaky $<$, $>$, $=$.

5	<input type="text"/>	6
4	<input type="text"/>	4
6	<input type="text"/>	3
2	<input type="text"/>	6
6	<input type="text"/>	6

6	<input type="text"/>	1
5	<input type="text"/>	4
4	<input type="text"/>	6
3	<input type="text"/>	5
5	<input type="text"/>	3


Vypočítaj.

$3 + 3 =$	<input type="text"/>
$5 + 1 =$	<input type="text"/>
$2 + 2 =$	<input type="text"/>
$4 + 1 =$	<input type="text"/>
$2 + 4 =$	<input type="text"/>

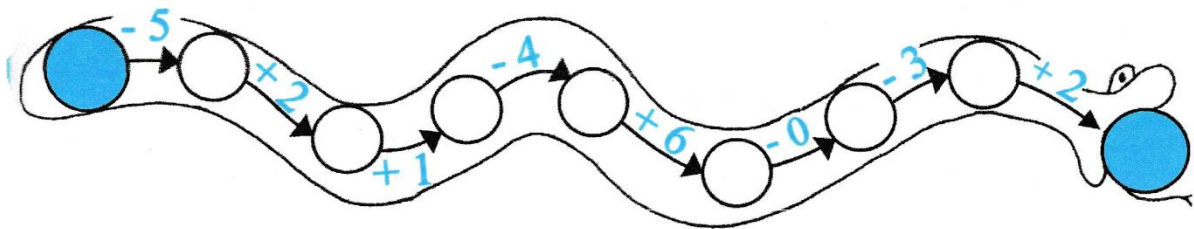
$6 - 5 =$	<input type="text"/>
$5 - 3 =$	<input type="text"/>
$6 - 4 =$	<input type="text"/>
$4 - 2 =$	<input type="text"/>
$6 - 3 =$	<input type="text"/>

Streda 17.6.2020

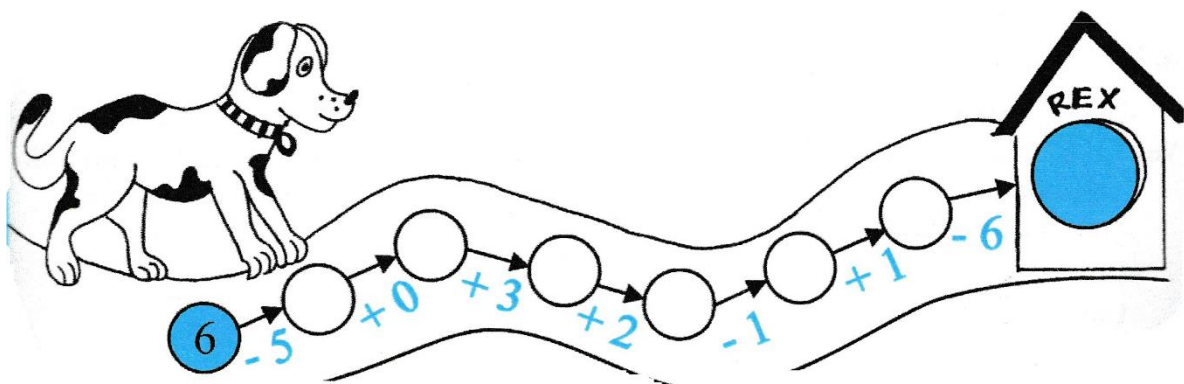
Rozlož číslo.



Zisti, aké číslo má had najradšej.




Vypočítaj.

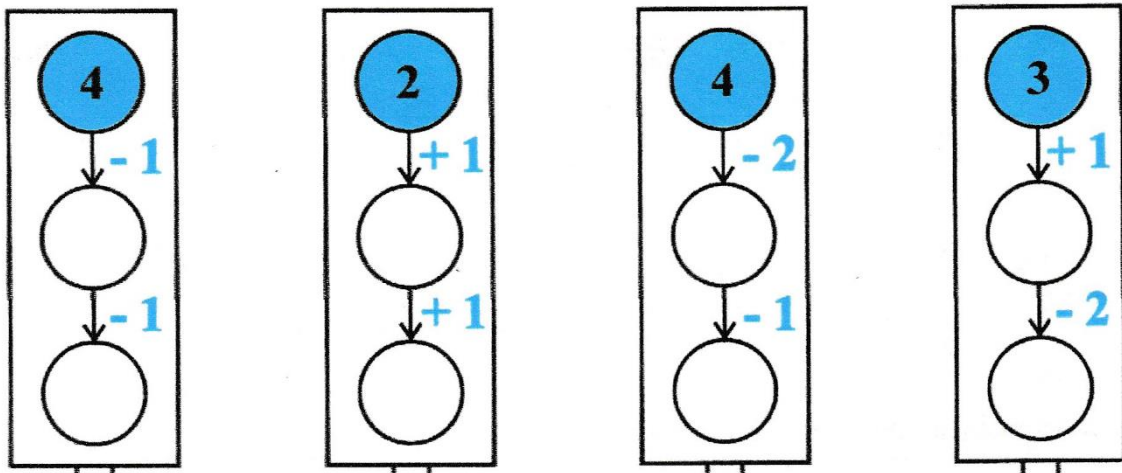


Štvrtok 18.6.2020

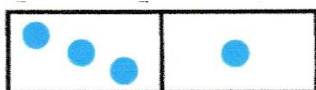
Rozlož.

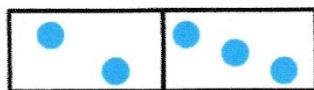



Doplň správne čísla do semaforov.



Napíš dva príklady ku karte. Jeden na sčítanie a jeden na odčítanie.









Piatok 19.6.2020

Nakresli mince do peňaženky tak, aby v nej bolo toľko eur , koľko na lístočku. Použiť môžeš mince



Balóniky postupne vyfarbuj a dopíš správne číslo.



Balóniky v okienkach spočítaj

a zapíš počet desiatok a jednotiek.

