

## Úlohy pre žiakov II.B triedy v týždni od 6.4. - do 8.4. 2020

Téma: Opakovanie učiva. Určovanie počtu objektov a porovnávanie do 20.

Milí žiaci, posielam Vám úlohy na tento týždeň.

1. Dopln' číselný rad ☺ :

		10	11	12			15			18	
--	--	----	----	----	--	--	----	--	--	----	--

20	19	18				14			11	10	
----	----	----	--	--	--	----	--	--	----	----	--

2. Porovnaj čísla ☺ :

$16 \square 17$

$10 \square 11$

$16 \square 14$

$0 \square 6$

$20 \square 9$

$12 \square 13$

$18 \square 20$

$10 \square 7$

$15 \square 15$

$19 \square 16$

$1 \square 13$

$14 \square 17$


$19 \square 13$

$7 \square 17$







$14 \square 10$






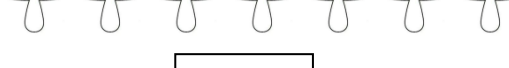
$19 \square 19$

3. Spájaj body od najmenšieho čísla po najväčšie číslo :



**1. Precvič si porovnávanie s obrázkami < > =**

		
	<input type="text"/>	
	<input type="text"/>	

		
	<input type="text"/>	
	<input type="text"/>	

**2. Usporiadaj čísla od najmenšieho po najväčšie:**

13, 6, 19, 0, 10 \_\_\_\_\_

11, 2, 17, 8, 12 \_\_\_\_\_

1, 9, 6, 20, 15 \_\_\_\_\_

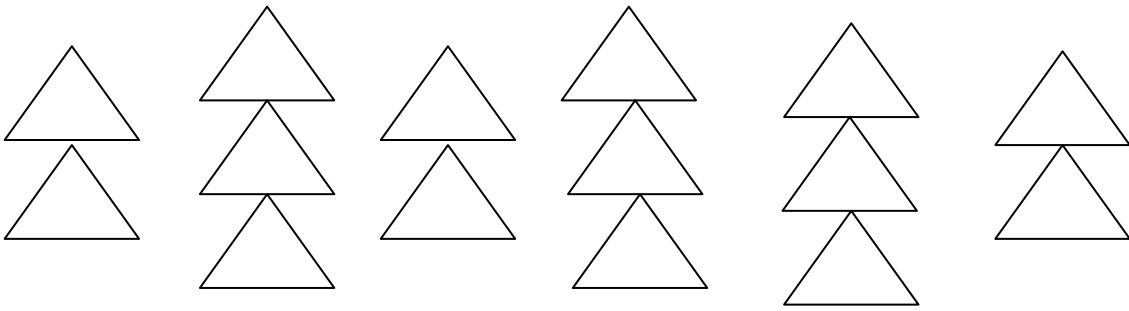
**3. Usporiadaj čísla od najväčšieho po najmenšie:**

5, 14, 7, 18, 3 \_\_\_\_\_

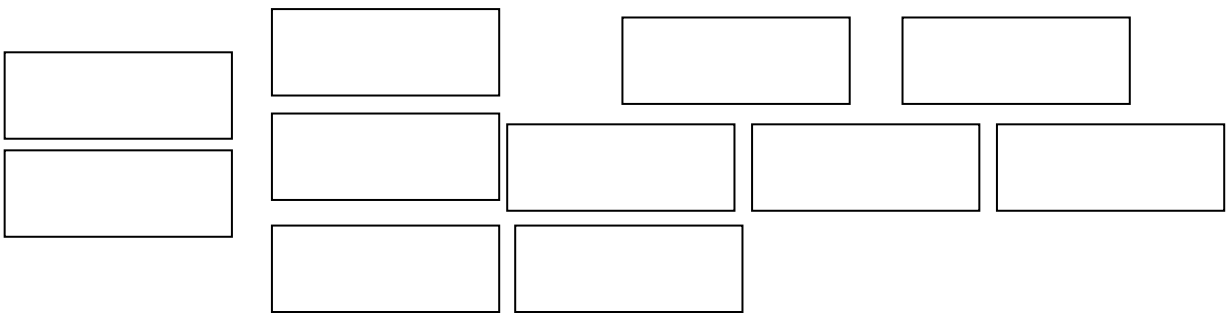
13, 8, 6, 12, 0 \_\_\_\_\_


3, 12, 4, 16, 11 \_\_\_\_\_

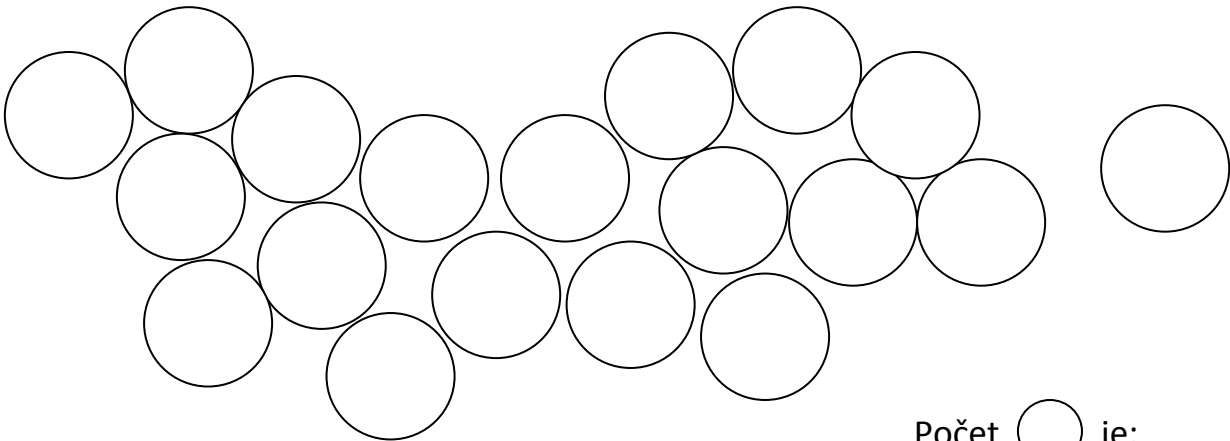
1. Pomenuj, spočítaj geometrické tvary a napíš ich počet:




Počet  je: \_\_\_\_\_



Počet  je: \_\_\_\_\_



Počet  je: \_\_\_\_\_



Počet  je: \_\_\_\_\_