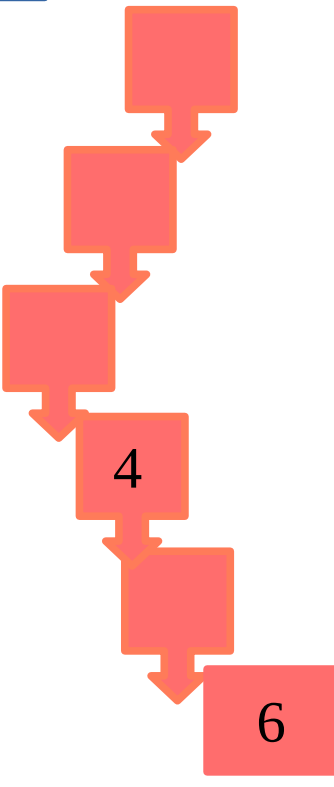

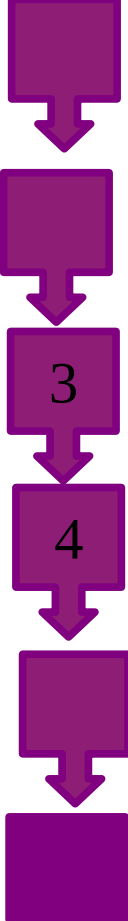


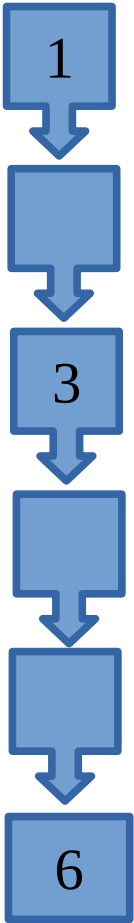
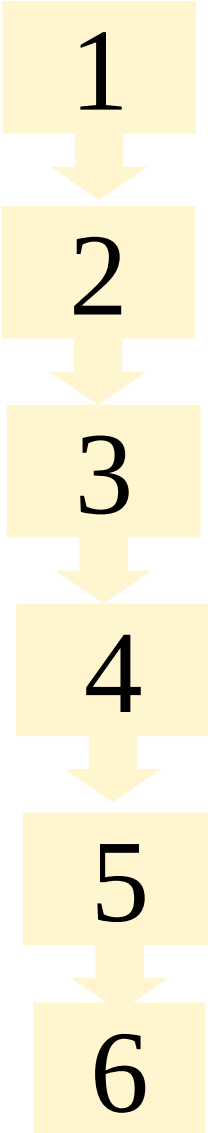


Správne doplň číselný rad:











VZOR:



Spočítaj kvety a správne zapíš

VZOR:



Zopakujme si číslicu 1, píš podľa predlohy



1. 2.



Správne vypočítaj, dúfam, že sa Ti bude dariť



$4 + 1 = \square$

$4 - 3 = \square$

$4 - 2 = \square$

$4 + 2 = \square$

$5 - 2 = \square$

$5 - 3 = \square$

$5 + 1 = \square$

$5 - 1 = \square$

$1 - 1 = \square$

$1 + 4 = \square$

$1 + 3 = \square$

$6 - 1 = \square$

$2 - 2 = \square$

$2 - 1 = \square$

$2 + 3 = \square$

$2 + 4 = \square$

=

$6 - 2 = \square$

$2 + 4 = \square$

$1 + 5 = \square$

$6 - 3 = \square$

Doplň vhodné čísla



$5 > \boxed{3}$

$2 = \boxed{\phantom{0}}$

$4 = \boxed{\phantom{0}}$

$3 < \boxed{\phantom{0}}$

$4 < \boxed{\phantom{0}}$

$2 > \boxed{\phantom{0}}$

$6 > \boxed{\phantom{0}}$

$1 = \boxed{\phantom{0}}$

Vymaluj daný počet:



3



2



4



1



5

