

# Matematika

Mgr. Katarína Baráthová

**Kontakt: zssnp13.katarinabarathova@gmail.com**

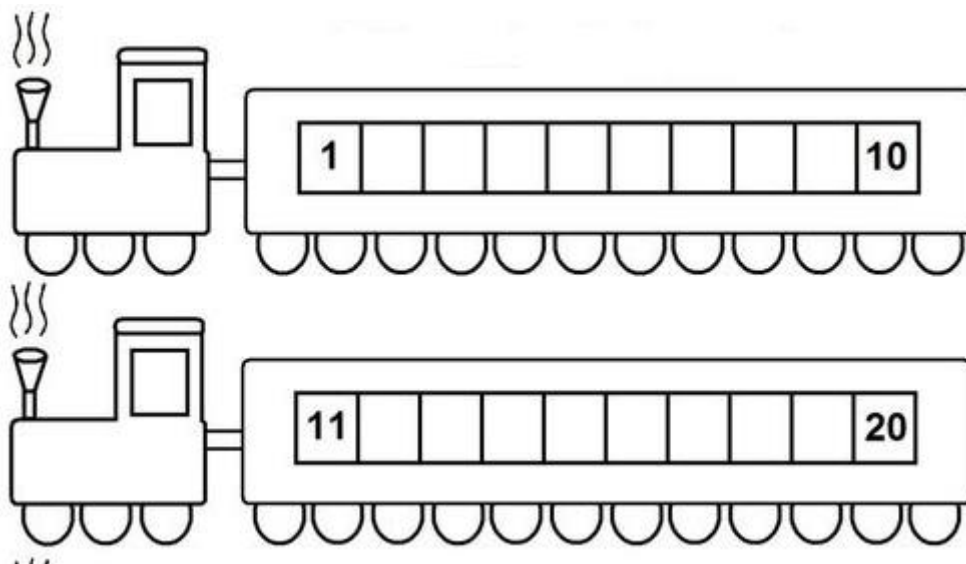
Už to nejako spolu vydržme, na vyplnenie voľného času Vám ponúkam tieto pracovné listy. Rozhýbte svoje hlavičky aj pri počítaní príkladov a po vypracovaní poprosím rodičov, aby mi práce zasielali na vyššie uvedenú adresu. Ak nemáte možnosť si to vytlačiť, môžete si príklady prepísať na papier a ten mi odfoťiť a preposlať. V prípade nejasností ma kl'udne prostredníctvom mailu kontaktujte. Ak by ste mali záujem o ďalšie úlohy kl'udne ma kontaktujte.

**Téma:** Sčítanie a odčítanie v obore do 20 pomocou zobrazovania.

1. Zopakujme si čísla v číselnom rade. Čítaj nahlas a ukazuj na prstoch. Nezabudni, ako sme si pri desiatke pomohli nohami a prekríž ich.

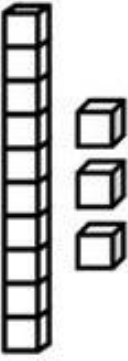
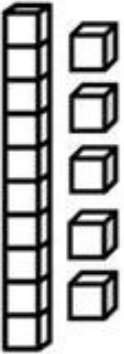

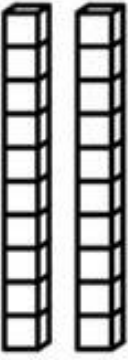
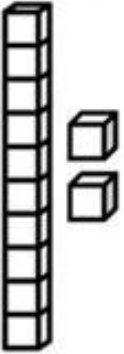

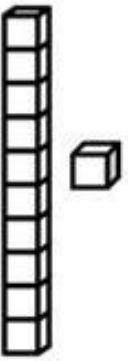

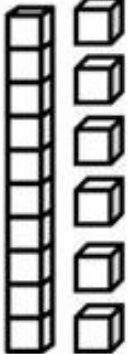
0	1	2	3	4	5	6	7	8	9	10
10	11	12	13	14	15	16	17	18	19	20

2. Doplň čísla do číselného radu.



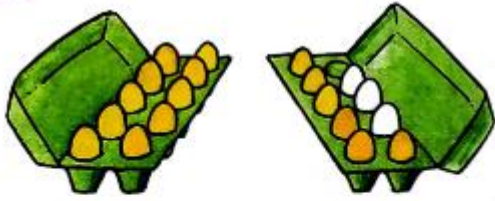
3. Spočítaj kocky a zapíš počet. Možnosti máš uvedené pod obrázkom.

Meno : \_\_\_\_\_

20 16 15 12 10 13 11 14

4. Rieš príklady.



$$16 + 3 = \square$$

10 6

$$12 + 7 = \square$$

10

$$15 + 3 = \square$$

10

$$13 + 4 = \square$$

10

5. Rieš príklady podľa zadania.



15	+	4	=	<input type="text"/>
4	+	15	=	<input type="text"/>




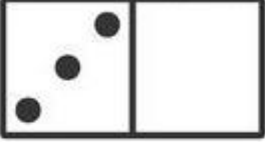

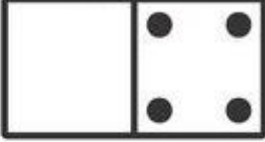





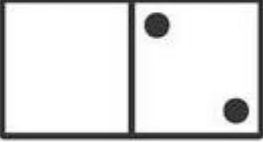






19	-	15	=	<input type="text"/>
19	-	4	=	<input type="text"/>




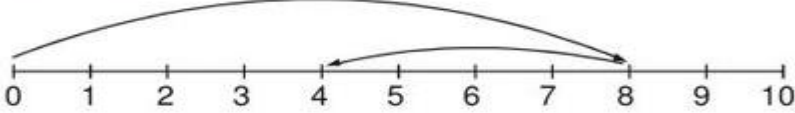

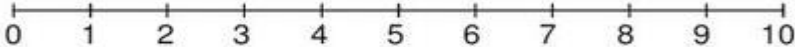

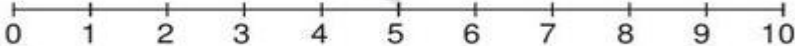
10	+	5	=	<input type="text"/>
5	+	10	=	<input type="text"/>

15	-	5	=	<input type="text"/>
15	-	10	=	<input type="text"/>

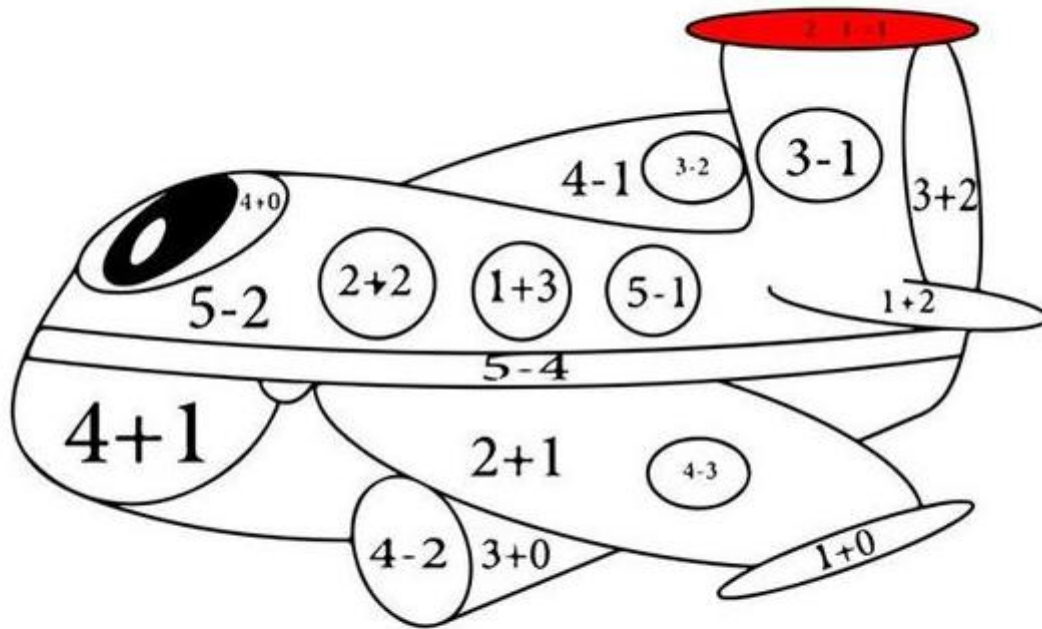
## 6. Rozlož čísla

## 7. Vypočítaj

	
	$\boxed{8} - \boxed{4} = \boxed{4}$
	
	$\boxed{6} - \boxed{3} = \boxed{\phantom{00}}$
	
	$\boxed{7} - \boxed{4} = \boxed{\phantom{00}}$

8. Vypočítaj príklad a vyfarbi

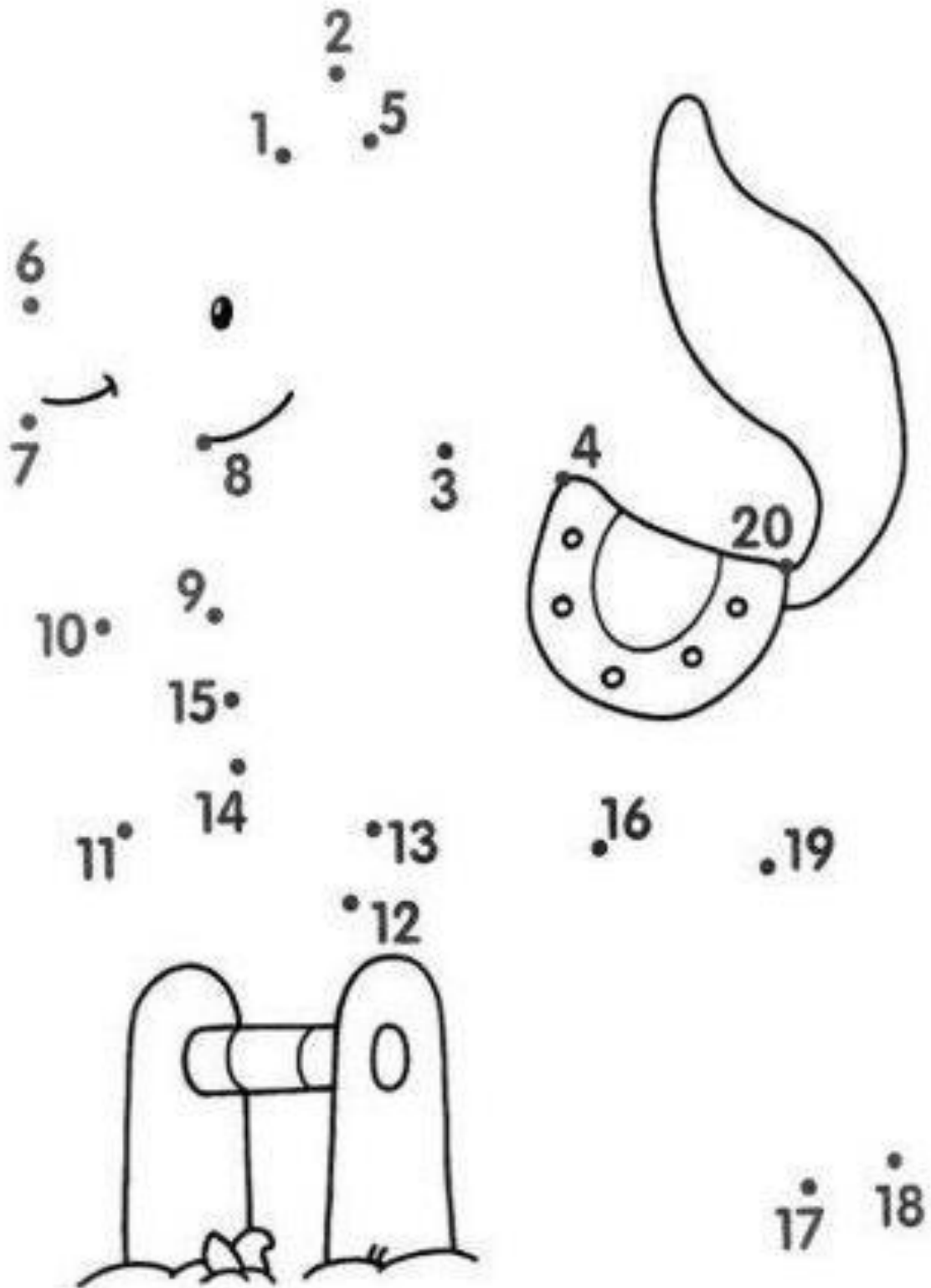


● 1 ● 2 ● 3 ● 4 ● 5

9. Doplň > < =

12		10
9		19
0		0
20		2
2		14

10. Spoj čísla od 1 do 20. obrázok vyfarbi.



Ako sa ti pracovalo?

